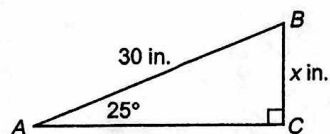


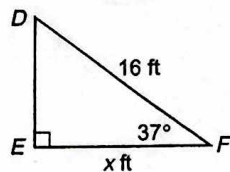
**5.4 Exercises - Right Triangle Trigonometry**

**Write an equation that you could use to solve for  $x$ . Then solve.  
Round decimal answers to the nearest tenth.**

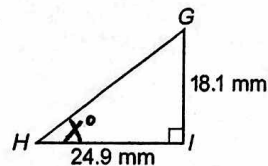
1.



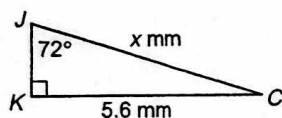
2.



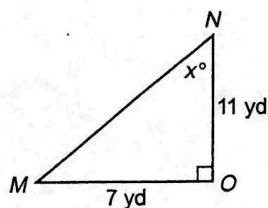
3.



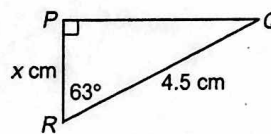
4.



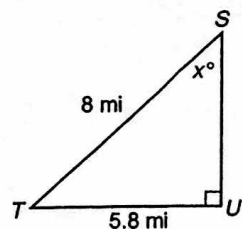
5.



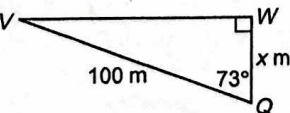
6.



7.



8.



9.

